

Please find today's learning tasks below.

The table below explains the tasks and you will find the resources underneath. Your child will know which challenge they usually access in each subject and which task will be appropriate for them.

Unless otherwise specified, please complete the tasks in either your Home Learning book or on a word document.

Year group: 4		Date: 7/7/20	
	Challenge 1	Challenge 2	Challenge 3
English	Watch the rest of episode 5 of the legend of Sir Gawain and the Green Knight that you started yesterday. Then, watch the final episode, when Sir Gawain returns to Camelot: https://www.bbc.co.uk/teach/class-clips-video/english-ks2-sir-gawain-and-the-green-knight-ep6/z7ftbdm Tomorrow, you will be retelling this final episode, so today you need to use the storyboard for your challenge below to plan what you will write. Make note of any adjectives, similes, sentence starters or key words you want to include.		
Maths	Bar charts Watch the video to recap how to interpret data on bar charts https://www.bbc.co.uk/bitesize/clips/z28jxnb Complete the bar chart problems below by interpreting and comparing the data from them. Choose the correct challenge for you.		
Reading	Complete the 60 second read below on Pandora's box		
Topic	French Read through the PowerPoint to learn about the seasons and then complete the wordsearch below. Can you remember what each word means when you've found it?		

English – Challenge 1









English – Challenge 2 and 3







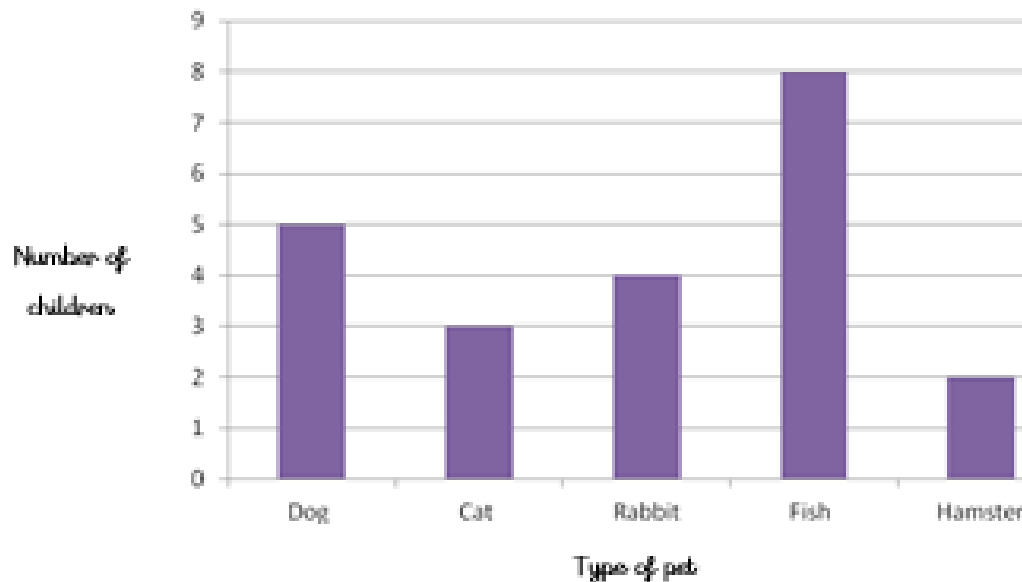






Maths – Challenge 1

A bar graph to show pets owned by children in Year 4.




- What is the most popular pet?
 - What is the least popular pet?
 - What is the difference between the two?
- How many children own a rabbit?
 - How many children own a hamster?
 - How many more children own a rabbit than a hamster?
- How many more own a fish than a cat?
- What is the difference between the number of children who own a dog and the number of children who own a cat?
- How many pets are owned altogether by the children in Year 4?

Maths – Challenge 1 continued


- 1 The pictogram shows how many books some classes read.

Class	Books read
Class 1	
Class 2	
Class 3	
Class 4	




Key

 = 5 books

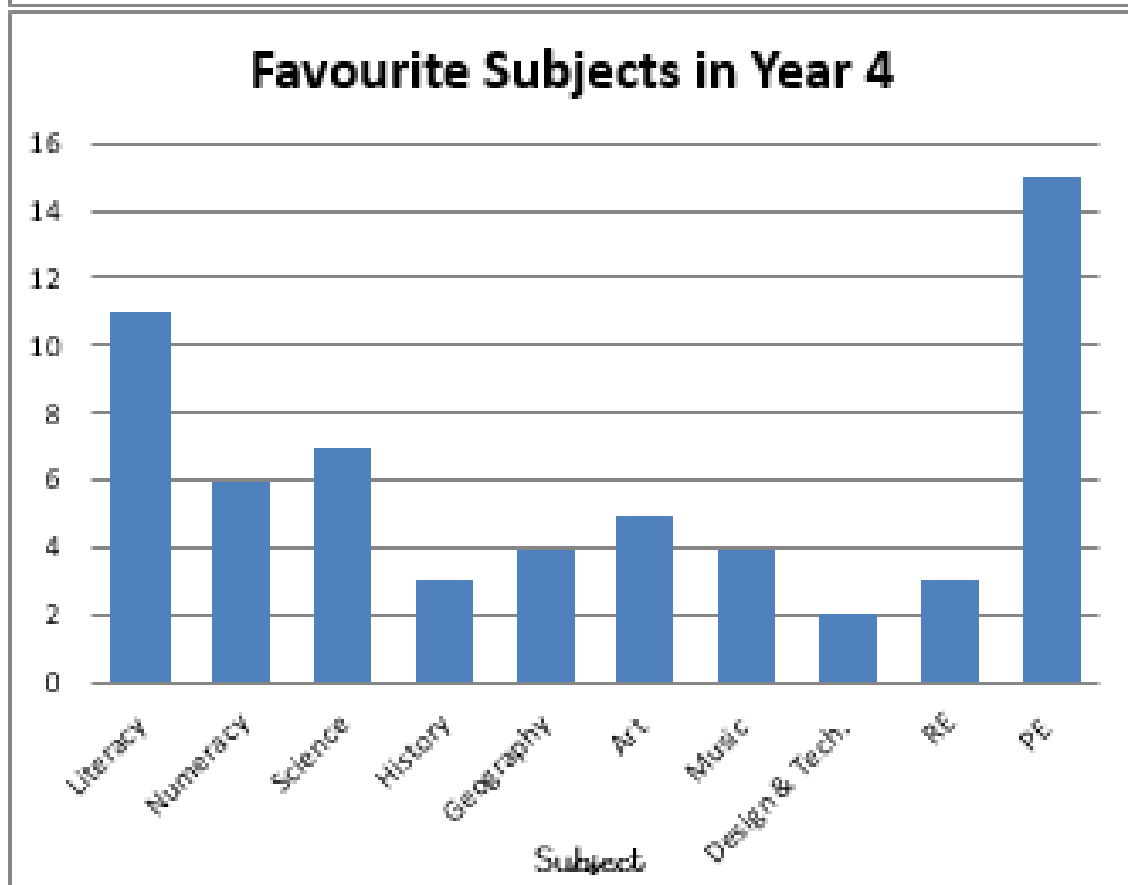
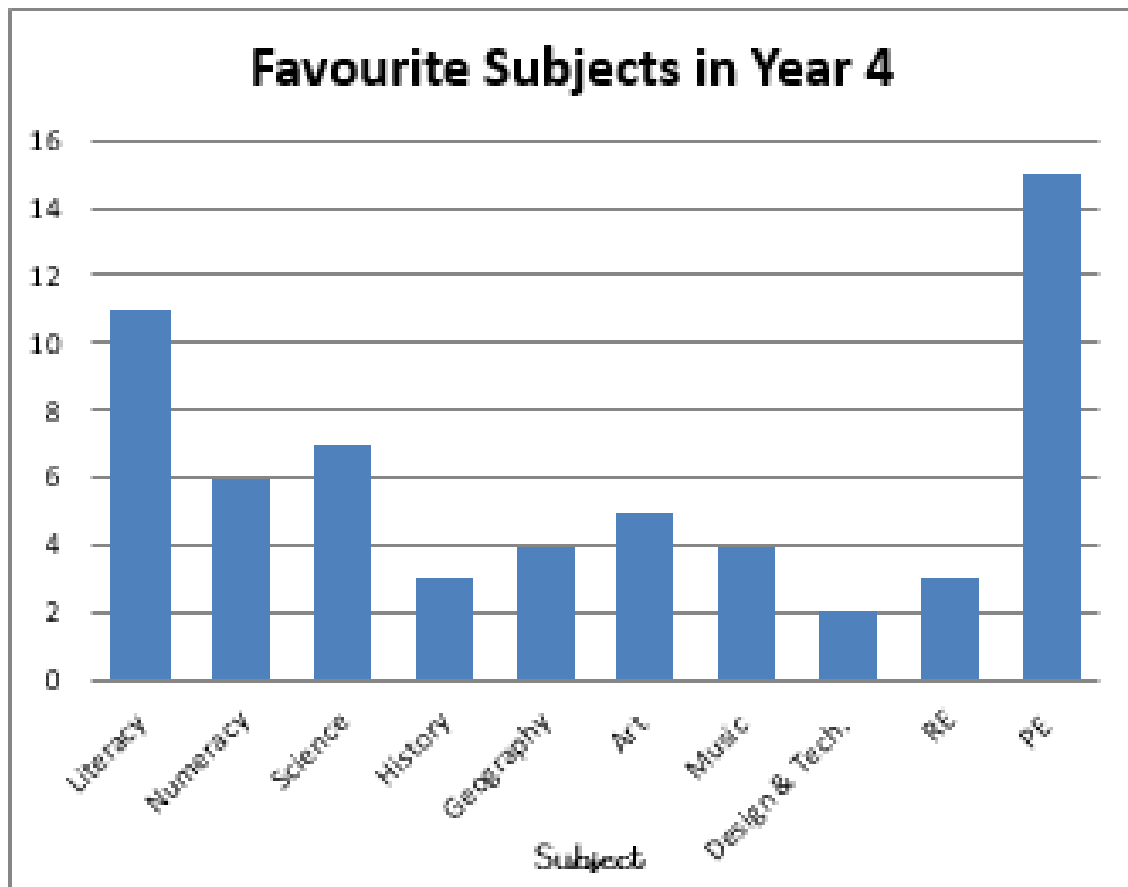
- Which class read the most books?
- Which class read the least books?
- How many more books did class 3 read than class 2?
- What other questions could you ask about the pictogram?

- 2 Use the clues to complete the pictogram to show how many apples each group collect.  = 10 apples.

- Group 6 collected twice as many as group 2
- Group 3 collected 35 more apples than group 5
- Group 1 collected a quarter of the amount group 4 collected.

Group	Apples
1	
2	
3	
4	
5	
6	

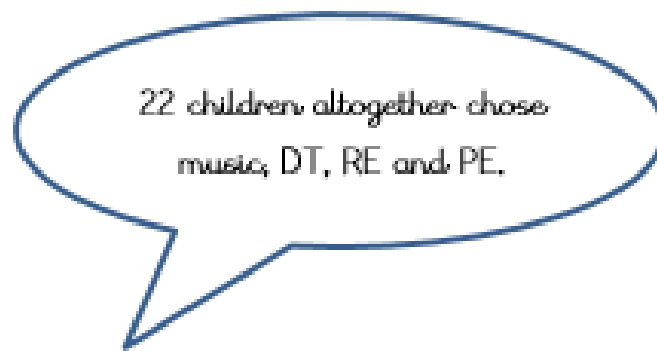
Maths – Challenge 2



Maths – Challenge 2 continued

- a) Which is the most popular subject?
b) Which is the least popular subject?
- How many children altogether chose science, history or geography?
- What is the difference between the number of children who chose literacy and the number who chose numeracy?
- How many more children chose PE than art?

Peter says:



What mistake might he have made?

Maths – Challenge 3

Team	Number of House points ● = 20 points
Sycamore	● ● ● ◐
Oak	● ● ● ◑
Beech	● ● ● ◒
Ash	● ● ◑

How many more points do Sycamore have than Ash?

How many points do Beech and Oak have altogether?

How many more points do Ash need to catch up with Oak?

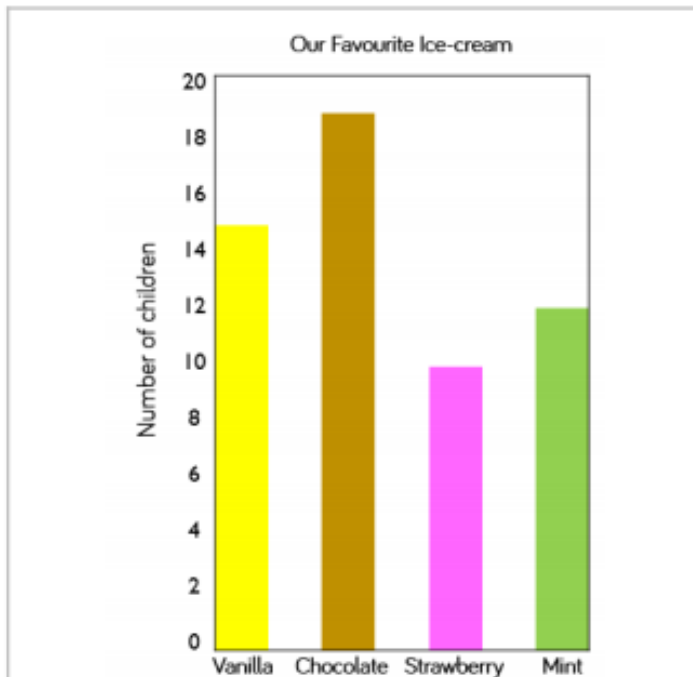
Activity	Number of votes
Bowling	9
Cinema	10
Swimming	7
Ice-skating	14

How many people voted in total?

$\frac{1}{4}$ of the votes were for _____.

7 more people voted for _____ than _____.

Maths – Challenge 3 (continued)



Hannah says,



We asked 54 people altogether.

Can you spot Hannah's mistake?
How many people were asked altogether?

Answer the questions using information from the tables.

City	Leeds	Wakefield	Bradford	Liverpool	Coventry
Population	720,000	316,000	467,000	440,000	305,000

- What is the difference between the highest and lowest population?
- Which two cities have a combined population of 621,000?

Reading – All Challenges

An Extract from Pandora's Box

7 Epimetheus went to visit his brother Prometheus,
17 who warned him not to accept any gifts from the
24 Gods. However, Epimetheus was so charmed by
32 Pandora that he thought she could never cause
41 any harm. Zeus was pleased that his plan was
50 working and as a wedding gift, gave Pandora a
52 small box.

60 When Pandora was given the box, she instantly
69 became curious. The box was locked but had a
80 small key and a note attached to it that said 'DO
88 NOT OPEN!' Pandora had promised that she would
99 not open the box but all she could think about was
108 its contents. Why would someone send her a box
118 and not allow her to open it? Pandora could no
127 longer stand the torture of not knowing what was
131 in the beautiful box.

Quick Questions



1. Find and copy two adjectives used to describe the box.



2. Who gave the box to Pandora as a gift?



3. Why do you think that Prometheus gave Epimetheus that warning?



4. What do you expect that Pandora will do next? Explain your answer.

Topic – All Challenges

The Seasons

n u i k s x a l g h r e
d v s a i s o n s n û p
c é w f j q û p e k j r
f m a b j t t u o j é i
v û b x u s d i l a t n
f é v r i e r a y n o t
i p q h n j g é û v a e
s e p t e m b r e i v m
k é t é w û l v r e r p
é c x s d h i v e r i s
t j u i l l e t b r l j
a u t o m n e a n é k o

saisons	janvier
automne	hiver
été	printemps
juin	juillet
avril	février
août	septembre