

Please find today's learning tasks below.

The table below explains the tasks and you will find the resources underneath. Your child will know which challenge they usually access in each subject and which task will be appropriate for them.

Unless otherwise specified, please complete the tasks in either your Home Learning book or on a word document.

Year group: 4		Date: 29/6/20	
	Challenge 1	Challenge 2	Challenge 3
English	Tomorrow you will be writing a conversation between two characters so let's refresh your brains on the rules of speech. Complete the worksheets below.		
Maths	For the first half of this week, we will be focussing on telling the time. We haven't covered telling the time this year due to school closure, so you might need an adult's help for this!		
	Watch this video about telling time to quarter past, half past and quarter to: https://www.youtube.com/watch?v=Pht7dTIM0VA&safe=active First, play this game (choose 'read time to the quarter hour' and '12 hour'): https://mathsframe.co.uk/en/resources/resource/116/telling_the_time# Then complete the worksheet below.	Listen to this song about how to tell the time to the nearest 5 minutes: https://www.youtube.com/watch?v=h6RNkQ7IU8Y&safe=active First, complete this game (choose 'read time to the nearest 5 minutes' and '12 hour'): https://mathsframe.co.uk/en/resources/resource/116/telling_the_time# Then, complete the worksheet below. Write the answers in the format '10 past 5', 'quarter to 7'	
Reading	Read the first 2 chapters of one of the e-books on the website (or just chapter 1 of 'The Story of Osiris')		
Topic	<i>For the next few topic activities, you will be given 'Year 4 Leavers' activities. Please send this work to your class teacher and make sure it is your best work as it will be used for something very special. All will be revealed soon...</i> Please write a few lines about your favourite year at Kingsfield. Make sure you include why it is your favourite year and what has made it so special.		

English – All challenges



Name: _____

Class: _____

Add the correct punctuation to these sentences.

- 1 Can I go next asked Klara.
- 2 I missed that ball again complained Sten.
- 3 Rounders is my favourite game exclaimed Stig.
- 4 Manu shouted Pass me the bat
- 5 We've lost again moaned Emma.
- 6 Meg called to Chip It's time to go home
- 7 I'm always missing the ball complained Rosa.
- 8 Run, Chip, run called Meg.
- 9 I'm too tired to play anymore stated Stig.
- 10 Sten asked Can I join in your game



Tick the correctly punctuated sentence.

- 11 "I really like the new kit," said Sten.

I really like the "new kit," said Sten.

I really like the new kit, "said Sten."



Name: _____ Class: _____

12 Stig looked at Granny and shouted, "Thank you for coming to watch us play!"

"Stig looked at Granny and shouted," Thank you for coming to watch us play!

Stig looked at Granny and shouted "Thank you for coming to watch us play!"

13 Sten cried "We've won the match at last!"

"Sten cried," We've won the match at last!

Sten cried, "We've won the match at last!"

14 "Where are the extra balls," asked Emma.

"Where are the extra balls?" asked Emma.

Where are the "extra balls?" asked Emma.

15 Sten shouted, "I scored" a rounder!

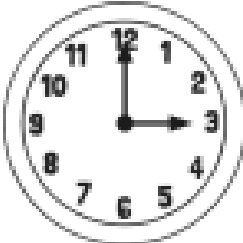










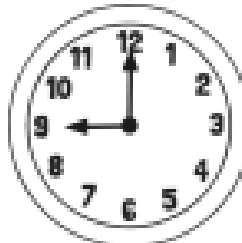
Sten shouted. "I scored a rounder!"

Sten shouted, "I scored a rounder!"

Maths – Challenge 1

Telling the Time

Write down the time each clock is showing on the line underneath.

 _____	 _____	 _____
 _____	 _____	 _____
 _____	 _____	 _____
 _____	 _____	 _____

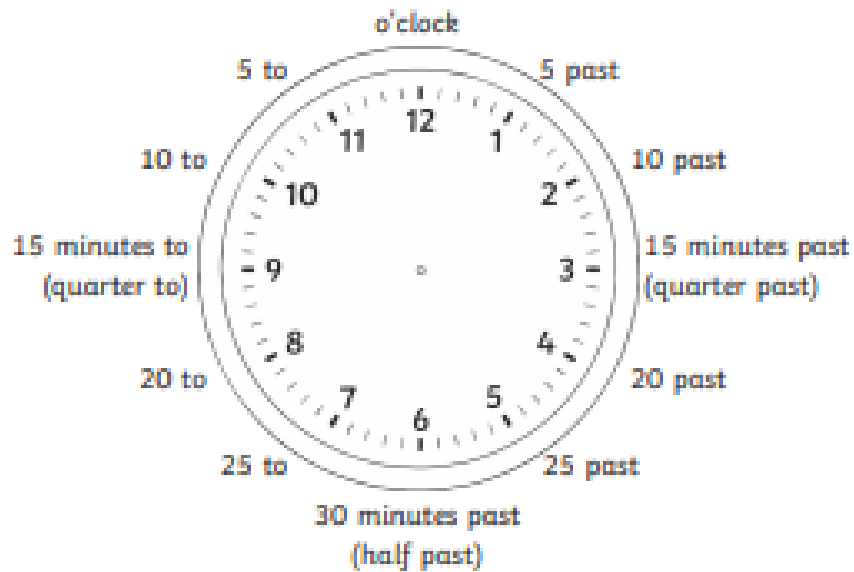
Maths – Challenge 2 & 3



Telling the Time in Five-Minute Intervals

I can tell and write the time in 5-minute intervals.

- 1) Write the time shown underneath each clock. Use this labelled clock to help.



a)



b)



c)





d)



e)



f)




g)



2) Draw hands on each clock to show the time.


a)



quarter to 6




b)



5 to 9

c)



20 past 11