

Please find today's learning tasks below.

The table below explains the tasks and you will find the resources underneath. Your child will know which challenge they usually access in each subject and which task will be appropriate for them.

Unless otherwise specified, please complete the tasks in either your Home Learning book or on a word document.

Year group: 4		Date: 23/6/20	
	Challenge 1	Challenge 2	Challenge 3
English	<p>Recap the legend, 'Sir Gawain and the Green Knight' by watching the clip... https://www.bbc.co.uk/teach/class-clips-video/english-ks2-sir-gawain-and-the-green-knight-ep2/znbs47h</p> <p>Now use yesterday's plan to help you write your diary entry from the perspective of Sir Gawain. Consider his thoughts and feelings throughout this clip. Remember, a diary entry is written in 1st person (I, me, my) so you will be pretending that you are Sir Gawain. You can use the diary entry templates below if you wish. Remember to start with 'Dear Diary,'</p>		
Maths	<p>Money Complete the converting pence to pounds and pounds to pence questions below. Remember there are 100 pennies in a pound.</p>	<p>Money Complete the converting pence to pounds and pounds to pence questions below. (Remember there are 100 pennies in a pound). Then complete the converting money problems below.</p>	<p>Money Complete the converting pounds and pence problems below</p>
Reading	Complete the 60 second read on the boy who cried wolf.		
Topic	<p><i>For the next few topic activities, you will be given 'Year 4 Leavers' activities. Please send this work to your class teacher and make sure it is your best work as it will be used for something very special. All will be revealed soon...</i></p> <p>Please write a few lines about your funniest moment at school. This could be from any year at Kingsfield. Make sure you include why it is your funniest moment and detail about the moment.</p>		

English – Challenge 1



English – Challenge 2 and 3



Maths - Challenge 1

$$1) 432p = £$$

$$2) 871p = £$$

$$3) 789p = £$$

$$4) 8731p = £$$

$$5) 6710p = £$$

Maths – Challenge 1 (continued)

1) £9.82 = _____p

2) £4.04 = _____p

3) £5.93 = _____p

4) £18.96 = _____p

5) £52.67 = _____p

Maths – Challenge 2

1) $8902p = \text{£}$

2) $\text{£}23.80 = \underline{\hspace{2cm}}p$

3) $67024p = \text{£}$

4) $\text{£}487.20 = \underline{\hspace{2cm}}p$

5) $67823p = \text{£}$

Maths – Challenge 2 (continued)

11a. Complete the table.

p	£ and p
	£4.30
1,272	
909	



VF

11b. Complete the table.

p	£ and p
2450	
	£8.77
1001	



VF

12a. How much money is in each jar?
Give your answer in pence and as a decimal.



VF

12b. How much money is in each jar?
Give your answer in pence and as a decimal.



VF

13a. I have 2 pound coins, 3 fifty pence coins and 6 twenty pence coins. How much money do I have altogether?



VF

13b. I have 4 two pound coins, a fifty pence coin and 9 twenty pence coins. How much money do I have altogether?



VF

14a. Which is the correct written version of the amount of money shown?



VF

14b. Which is the correct written version of the amount of money shown?



VF

15a. What is the value of the underlined digit?

- a) £30.45 b) £29.96 c) £12.93



VF

15b. What is the value of the underlined digit?


- a) £10.05 b) £210.65 c) £12.99





VF

Maths – Challenge 3

Some children are converting pence in to pounds.

 **708p = £7.80**
Claudia

 **£6.50 = 65p**
Ruby

 **1,260p = £1.26**
Mason

Can you spot their mistakes?

Jenny has these coins:



She picks three coins at a time.
Decide whether the statements will be always, sometimes or never true.

- She can make a total which ends in 2
- She can make an odd amount
- She can make an amount greater than £6
- She can make a total which is a multiple of 5

Can you think of your own always, sometimes, never statements?

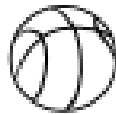
Maths – Challenge 3 (continued)

7a. Kyle and Erin both want to buy a basketball. A basketball costs £4.50.

Kyle says, "I have three £1 coins, a 20p coin, two 50p coins and three 5p coins."

Erin says, "I have two £1 coins less and three 50p coins more than Kyle".

Who can afford to buy a basketball?
Explain how you know.



R

7b. Jack and Tamina both want to buy a rubber duck. A rubber duck costs £2.80.

Tamina says, "I have a £1 coin, seven 20p coins and four 5p coins."

Jack says, "I have one more £1 coin and 4 less 20p coins than Tamina."

Who can afford to buy a rubber duck?
Explain how you know.



R

8a. How much does each child have?
Write your answer in pence and in decimals.



Kevin

I have six two pound coins, one fifty pence coin and two ten pence coins.

I have a ten pound note, one two pound coin and three twenty pence coins.



Leah



P5

8b. How much does each child have?
Write your answer in pence and in decimals.



Nell

I have a five pound note, four one pound coins and eight twenty pence coins.

I have a ten pound note, a five pound note and thirteen 50 pence coins.




Lucas



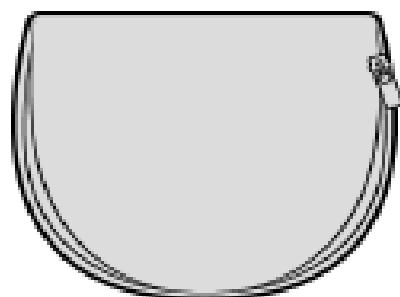
P5

9a. Alfie has £11.60 in his piggy bank. He has one note and five coins.
What combinations could Alfie have?
Find two different ways.



P5

9b. Ryan has £12.75 in his wallet. He has one note and six coins.
What combinations could Alfie have?
Find two different ways.



P5

Reading - All Challenge

The Boy Who Cried Wolf

9 Once, long ago, there was a mischievous boy who
18 looked after some sheep near a village. The boy
28 was often bored. One day, he decided to play a
32 trick on the villagers.

39 "Wolf! Wolf!" he shouted loudly. The villagers
48 came rushing up the hill to save the sheep.

57 However, when they got there, there was no wolf
67 to be seen. The boy laughed with glee. "I tricked
70 you!" he said.

78 "You must not tell lies!" shouted the villagers
87 angrily and they returned to the village. The bored
96 boy once again repeated his hoax. Later that day,
106 a huge wolf really did come into the field. Despite
113 the boy's cries, nobody came to help.

Quick Questions



1. Find and copy a phrase which describes how the boy laughed.



2. Who shouted angrily at the boy?



3. Why do you think that nobody came to help 'despite the boy's cries'?



4. Find and copy two words from the text which mean the same as 'joke'.
