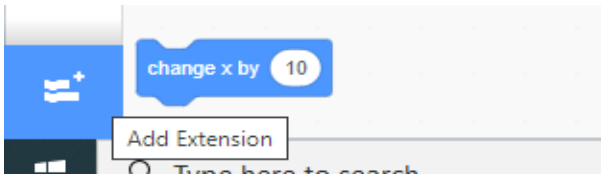


Please find today's learning tasks below.

The table below explains the tasks and you will find the resources underneath. Your child will know which challenge they usually access in each subject and which task will be appropriate for them.

Unless otherwise specified, please complete the tasks in either your Home Learning book or on a word document.

Year group: 4		Date: 8/6/20	
	Challenge 1	Challenge 2	Challenge 3
English	Homophones Cross out the incorrect homophones to complete the sentence and then explain what each word means on the sheet below.	Homophones Find and write down homophones for the words given, e.g. waste and waist. On the following sheet, write out the passage and correct the homophones using the words in the box to help you.	
Maths	Adding fractions with the same denominator Watch the clip below up to 0:40 to remind you how to add fractions. https://www.bbc.co.uk/bitesize/topics/zhdwxnb/articles/z9n4k7h Add the fractions below by shading the fraction bars to help you.	Adding fractions with the same denominator Watch the clip below up to 0:40 to remind you how to add fractions. https://www.bbc.co.uk/bitesize/topics/zhdwxnb/articles/z9n4k7h Add the fractions below.	Adding fractions with different denominators Watch the clip below to remind you how to add fractions. https://www.bbc.co.uk/bitesize/topics/zhdwxnb/articles/z9n4k7h Solve the fractions problems below by converting them so they have the same denominator and then adding the two fractions together.
Reading	Complete the reading comprehension for your challenge about Captain Tom Moore!		
Topic	Computing - Practise your coding skills by accessing Scratch https://scratch.mit.edu/ and select 'start creating'. Have a play and see what you can remember. To add the pen feature, click the 'add extension' button as shown. Can you draw a square, rectangle or even a pentagon?		

English – Challenge 1

Homophones

Complete the sentences by neatly crossing out the incorrect homophone.

1. Last knight/night I went for a walk in the moonlight.
2. Blue/blew is my favourite colour.
3. If you want to go on holiday, you'll have to catch a plane/plain.
4. I brush my hare/hair every day.
5. The lion had huge paws/pours.
6. Thomas couldn't wait to meat/meet the new teacher.
7. Bernard got mud on his new/knew shoes.
8. I'm over here/hear!
9. Benny's hiding over they're/there/their.
10. Suzanne scraped her knee and now it's really saw/sore.

English – Challenge 1 (continued)

Homophones

These words are all homophones. Try to define what each one means.

or: _____

oar: _____

sale: _____

sail: _____

here: _____

hear: _____

tail: _____

tale: _____

pail: _____

pale: _____

pour: _____

poor: _____

male: _____

mail: _____

English – Challenge 2 & 3

Homophones

Find homophones for these words:

week

place

read

rode

board

sea

there

boy

right

witch

peel

four

serial

son

know

waste

heel

tail

pane

weight

poor

mail

English – Challenge 2 & 3 (continued)

Homophones

Some of these words are homophones. Circle them.

pair	mane	waste	sweat
late	hear	rice	reed
mummy	care	seen	father
plaice	oar	check	plug
hour	paint	rain	

Copy this passage out, correcting the homophones as you do:

It was knight and the sky was pooring with reign. The hole ship rocked on the stormy see and the wind blue hard tearing the sale. The captain new they kneaded to fix it quick, so he called out to too crewmen. As the pear ran off to fetch knew rope the captain, who usually had nerves of steal, preyed that the ship wood knot sink. Suddenly, a peace of would broke off from the deck and flue towards him!

Maths – Challenge 1



Adding Fractions

Colour in the fraction bars to show these calculations and then give the answers.

1. $\frac{2}{5} + \frac{1}{5} =$



2. $\frac{1}{3} + \frac{1}{3} =$




3. $\frac{4}{8} + \frac{3}{8} =$




4. $\frac{2}{7} + \frac{3}{7} =$



5. $\frac{1}{4} + \frac{3}{4} =$ or



6. $\frac{3}{6} + \frac{1}{6} =$



7. $\frac{4}{9} + \frac{4}{9} =$



8. $\frac{2}{10} + \frac{4}{10} + \frac{3}{10} =$



Maths – Challenge 2

Add the fractions.

1. $\frac{2}{5} + \frac{1}{5} = \underline{\quad}$

2. $\frac{1}{3} + \frac{2}{3} = \underline{\quad}$

3. $\frac{1}{3} + \frac{1}{3} = \underline{\quad}$

4. $\frac{2}{4} + \frac{1}{4} = \underline{\quad}$

5. $\frac{3}{5} + \frac{2}{5} = \underline{\quad}$

6. $\frac{3}{5} + \frac{1}{5} = \underline{\quad}$

7. $\frac{3}{6} + \frac{1}{6} = \underline{\quad}$

8. $\frac{2}{6} + \frac{3}{6} = \underline{\quad}$

9. $\frac{4}{7} + \frac{2}{7} = \underline{\quad}$

10. $\frac{1}{7} + \frac{5}{7} = \underline{\quad}$

11. $\frac{3}{8} + \frac{2}{8} = \underline{\quad}$

12. $\frac{5}{9} + \frac{3}{9} = \underline{\quad}$

13. $\frac{6}{10} + \frac{3}{10} = \underline{\quad}$

14. $\frac{3}{10} + \frac{1}{10} = \underline{\quad}$

15. $\frac{3}{8} + \frac{3}{8} = \underline{\quad}$

16. $\frac{5}{12} + \frac{1}{12} = \underline{\quad}$

17. $\frac{3}{12} + \frac{4}{12} = \underline{\quad}$

18. $\frac{2}{15} + \frac{8}{15} = \underline{\quad}$

19. $\frac{3}{20} + \frac{9}{20} = \underline{\quad}$

20. $\frac{2}{11} + \frac{5}{11} = \underline{\quad}$

4

$$\frac{\square}{4} + \frac{\square}{4} = \frac{9}{4}$$

What could the missing numerators be?

Give four different possibilities.

$$\frac{\square}{4} + \frac{\square}{4} = \frac{9}{4}$$

$$\frac{\square}{4} + \frac{\square}{4} = \frac{9}{4}$$

$$\frac{\square}{4} + \frac{\square}{4} = \frac{9}{4}$$

$$\frac{\square}{4} + \frac{\square}{4} = \frac{9}{4}$$

Maths – Challenge 3

$$\frac{11}{12} + \frac{1}{4} = \boxed{}$$

$$\frac{9}{10} + \frac{4}{5} = \boxed{}$$

$$\frac{2}{3} + \frac{5}{6} = \boxed{}$$

$$\frac{1}{12} + \frac{1}{3} = \boxed{}$$

$$\frac{3}{4} + \frac{3}{8} = \boxed{}$$

$$\frac{5}{6} + \frac{7}{12} = \boxed{}$$

$$\frac{7}{8} + \frac{1}{4} = \boxed{}$$

$$\frac{2}{3} + \frac{5}{12} = \boxed{}$$

$$\frac{5}{8} + \frac{1}{2} = \boxed{}$$

$$\frac{3}{4} + \frac{1}{12} = \boxed{}$$

2 Match the additions that have the same answer.

$$\frac{3}{4} + \frac{1}{12}$$

$$\frac{10}{12} + \frac{1}{12}$$

$$\frac{2}{3} + \frac{1}{12}$$

$$\frac{6}{12} + \frac{1}{12}$$

$$\frac{5}{6} + \frac{1}{12}$$

$$\frac{9}{12} + \frac{1}{12}$$

$$\frac{1}{2} + \frac{1}{12}$$

$$\frac{8}{12} + \frac{1}{12}$$

Reading – Challenge 1

Captain Tom Moore

Captain Tom Moore is the ex-soldier who made headlines around the world in April 2020, when he set out to raise money for the National Health Service, by walking 100 laps around his garden. Not only did he raise an incredible amount of money, but he also broke several world records at the same time.

Who is Captain Tom Moore?

Captain Tom was born in Yorkshire on 30th April 1920. He was a soldier in the British Army and served in the Second World War. He currently lives in Bedfordshire with one of his two daughters and her family.

Captain Tom saw the hard work the hospital staff were doing, when he watched the news during the COVID-19 crisis. Because of this and because he had been well looked after in hospital himself, he decided that he wanted to do something to raise money for the National Health Service (NHS).

Why 100?

Captain Tom began his challenge as a 99 year old. He decided to walk 100 laps of his garden (10 each day), leading up to his 100th birthday, which was on 30th April 2020. He set himself a target of £1000, which he reached in a day. Captain Tom completed his laps with the aid of a walking frame.



By the time he finished the 100 laps, he had raised over 27 million pounds!

Breaking Records

With his story shared around the world, more and more people donated money and Captain Tom broke several records during his fundraising efforts.

He has raised more money from a charity walk than any other single person.
He released a charity song, which became the highest selling single of 2020.
He is the oldest person ever to have a song at number one in the charts.



Reading – Challenge 1 (continued)

Did You Know...?



Captain Tom completed his 100 laps two weeks before his birthday, so decided to increase the number of laps he walked to 200.

Captain Tom Moore Questions

1. How many laps of his garden did Captain Tom plan to walk before his birthday? Tick **one**.

- 100
- 200
- 1000
- 30

2. Draw lines to show when the events happened.

Captain Tom began his challenge.	1 st
Captain Tom released a single.	3 rd
Captain Tom finished his 100 laps.	4 th
Captain Tom celebrated his 100 th birthday.	2 nd

3. How would you describe Captain Tom? Tick **two**.

- Determined
- Charitable
- Friendly
- Shy

4. Write **True** or **False** for each statement.

Captain Tom wanted to raise £1000.	
Tom Jones released a single with Captain Tom.	
Captain Tom raised money for the NHS.	
Captain Tom used to be a soldier.	

Reading – Challenge 1 (continued)

Captain Tom Moore Questions

5. Find and copy one word that means amazing.

6. What does NHS stand for?

7. How do you think Captain Tom felt when he realised how much money he had raised? Explain your answer.

Reading – Challenge 2 & 3

Captain Tom Moore

Captain Tom Moore is the **veteran** who made headlines around the world in April 2020, when he set out to raise money for the National Health Service, by walking 100 laps around his garden. Not only did he raise an incredible amount of money, but he also broke several world records at the same time.

Who is Captain Tom Moore?

Captain Tom was born in Yorkshire on 30th April 1920. He was a soldier in the British Army and served in the Second World War. He currently lives in Bedfordshire with one of his two daughters and her family.

Captain Tom saw the hard work the hospital staff were doing, when he watched the news during the COVID-19 crisis. He had been well looked after in hospital himself, after a hip operation several years ago and he decided that he wanted to do something to raise money for the National Health Service (NHS).

Why 100?

Captain Tom began his challenge as a 99 year old. He decided to walk 100 laps of his garden (10 each day), leading up to his 100th birthday, which was on 30th April 2020. He set himself a target of £1000, which he reached in a day.



Captain Tom completed his laps with the aid of a walking frame. By the time he finished, he had raised over 27 million pounds!

Breaking Records

With his story being shared around the world, more and more people donated money and Captain Tom broke several records during his fundraising efforts.




Reading – Challenge 2 & 3 (continued)

Captain Tom Moore

He has raised more money from a charity walk than any other single person. He released a charity song, with singer Michael Ball and the NHS Voices of Care Choir, which became the highest selling single of 2020 in the UK. He is the oldest person ever to have a song at number one in the charts.

Did You Know...?



- Captain Tom completed his 100 laps two weeks before his birthday, so decided to increase the number of laps he walked to 200.
- The Royal Mail stamped every item posted during the week of his 100th birthday, with a special postmark with a message for Captain Tom.
- People have been inspired by his story and have sent him birthday cards. He had so many cards, they had to be stored in the local school hall.
- Captain Tom completed his laps, while wearing his three army medals.

Glossary

veteran An ex-member of the armed forces.

Reading – Challenge 2 & 3 (continued)

Captain Tom Moore Questions

1. What does NHS stand for? Tick **one**.

- New Hospital Staff
- National Health Service
- National Hospital Staff
- Nurses & Health Staff

2. Draw lines to show when the events happened.

Captain Tom began his challenge.	1 st
Captain Tom released a single.	3 rd
Captain Tom finished his 100 laps.	4 th
Captain Tom celebrated his 100 th birthday.	2 nd

3. How do you think Captain Tom felt when he heard how much money he had raised? Tick **two**.

- Sad
- Amazed
- Disappointed
- Humbled

4. Write **True** or **False** for each statement.

Captain Tom wanted to raise £1000.	
Tom Jones released a single with Captain Tom.	
Captain Tom raised money for the NHS.	
Captain Tom used to be a sailor.	

Reading – Challenge 2 & 3 (continued)

Captain Tom Moore Questions

5. Read the paragraph 'Why 100?' Find and copy one word that means the same as help.

6. Fill in the missing words.

He is the _____ person ever to have a song at number one in the _____.

7. Why do you think Captain Tom wanted to raise money for the NHS?

8. Describe Captain Tom in two words and explain your choices.
