


Please find today's learning tasks below.

The table below explains the tasks and you will find the resources underneath. Your child will know which challenge they usually access in each subject and which task will be appropriate for them. There is a sticker in the front of their Red Home Learning Books if they were able to get one in the last week. If they did not any exercise book or lined paper will be fine.

Year group: 1/2			Date: Tuesday 5 th May		
	Challenge 1	Challenge 2	Challenge 3	Challenge 4	Challenge 5
Watch https://www.youtube.com/watch?v=M-aceEquCtY Carla's Sandwich by Debbie Herman					
English	Please see separate e-mail	Think about the sandwiches made in the story. Which sounded tasty to you? If you could have anything in your sandwich, what would you have? Write a list of ingredients for your delicious sandwich. (See below)		Think about the sandwiches made in the story. Which sounded tasty to you? If you could have anything in your sandwich, what would you have? Write a list of ingredients for your delicious sandwich. Make sure you use 2 adjectives to describe the ingredients. (See below)	
Maths	Finding half. Share the bees equally onto the flowers.	Solve the halving problems. You can use objects or draw counters to help you.	Solve the halving problems. You can use objects or draw counters to help you.	Solve the halving problems. You can use objects or draw counters to help you.	
Reading	Log on to Rising stars, reading planet today and choose an e book to read.				

Phonics	<p>Go to http://phonicsplaycomics.co.uk/comic_ph2_a_bug.html and read A bug</p> 	<p>Go to http://phonicsplaycomics.co.uk/comic_ph3_lets_go.html and read Let's Go</p> 	<p>Go to http://phonicsplaycomics.co.uk/comic_ph5a_the_holiday.html and read The Holiday</p> 	<p>Log onto Education City. In Year 2, English, Writing, Activities look for 'Force Field'. The activity today is using what you learnt yesterday so if you struggle, watch the Learn Screen again.</p>
Other	<p>Today we are continuing to think about VE Day. Go to youtube and watch and listen to https://www.bbc.co.uk/cbbc/watch/horrible-histories-songs-ve-day-song</p>  <p>Go to YouTube and search for VE Day music. Can you find and listen to Andrews Sisters Boogie Woogie Bugle Boy or In the Mood. How do these songs make you feel? Are they happy or sad songs? Why is that? Which songs do you like that make you happy? Can you sing one with someone in your house or find it on YouTube and listen to it?</p>			

Unless otherwise specified, please complete the tasks in either your homework book or on a word document.

English - Challenge 2/3

Mrs Gray's Super Deluxe Sandwich

Ingredients

2 slices of soft, white bread,

Mayonnaise,

Crispy lettuce,

4 slices of cucumber,

Smoked ham,

2 slices of cheddar cheese,

Chicken,

Roast beef,

6 chocolate buttons,

1 pack of ready salted crisps.

What would you put in your sandwich?

English - Challenge 4/5

Mrs Gray's Super Deluxe Sandwich

Ingredients

2 slices of soft, white bread,
Fresh, homemade mayonnaise,
Crispy, fresh lettuce,
Sliced, green cucumber,
Smooth, smoked ham,
2 slices of creamy, cheddar cheese,
Fresh, white chicken,
Warm, roast beef,
6 round, chocolate buttons,
1 pack of cooked, salty crisps.

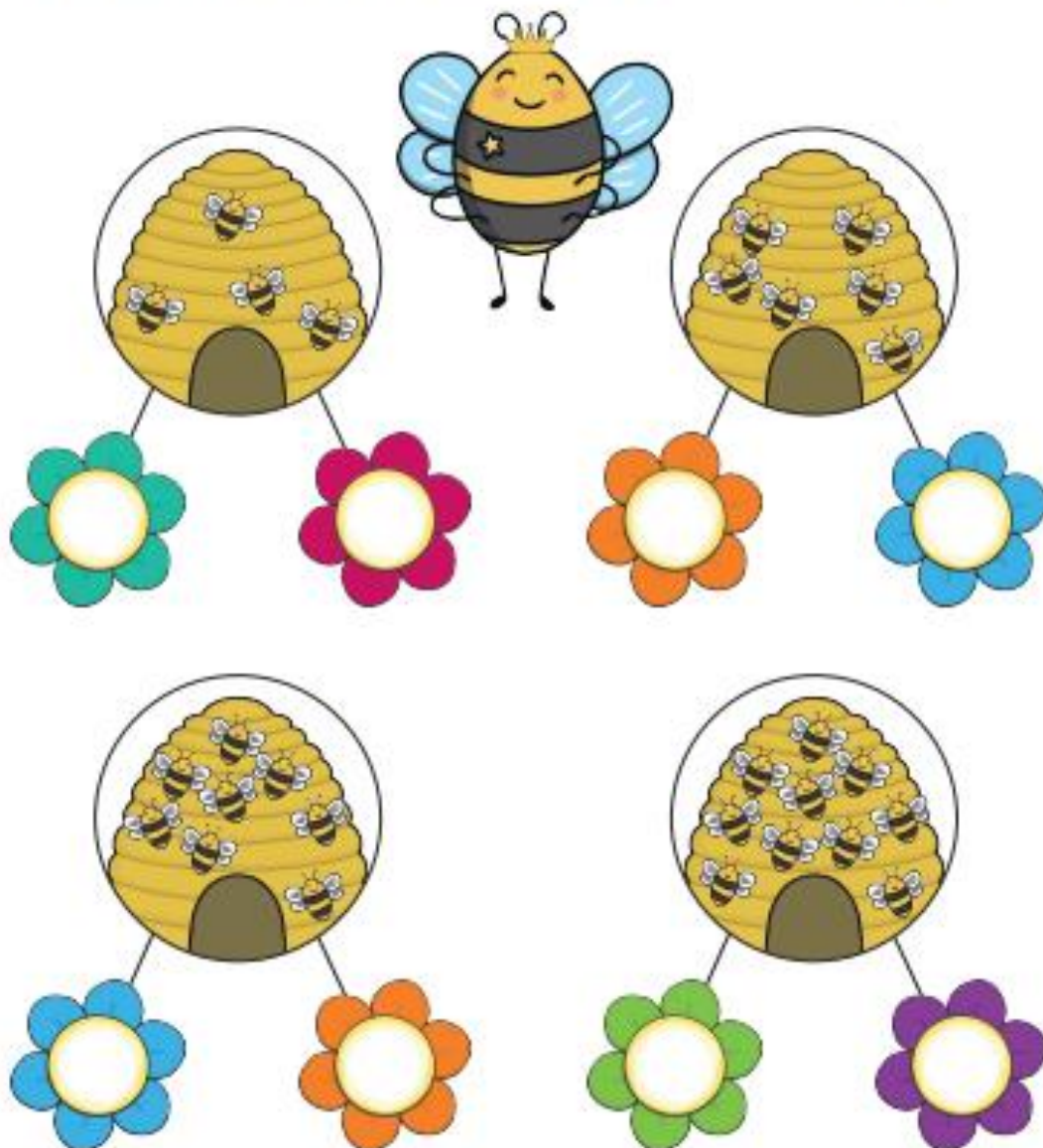
What would you put in your sandwich?

Maths - Challenge 1

Bees in the Garden Halving Activity

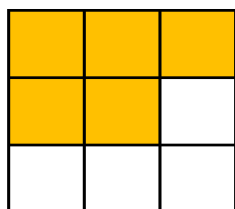
The queen bee needs to share the bees out fairly so that each flower has half the number of bees from the hive.

Can you help the queen bee put half of the bees on to each flower? Draw the bees on the flowers.



Extension


1a. Danika thinks she has coloured in half of the squares. Do you agree?



Why or why not?



1b. Jonas thinks he has coloured in half of the squares. Do you agree?

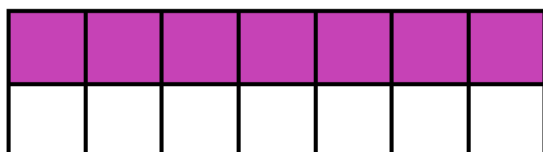


Why or why not?



Maths - Challenge 2

1a. Complete the statement based on the picture below.



Half of _____ is _____.

1b. Complete the statement based on the picture below.



Half of _____ is _____.

2a. I am thinking of a number.

Half of the number is 4.

What number am I thinking of?



VF

2b. I am thinking of a number.

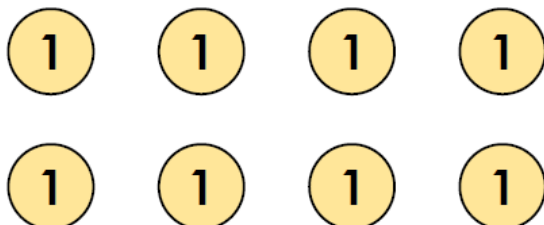
Half of the number is 7.

What number am I thinking of?

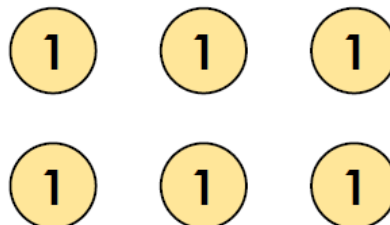


VF

3a. Here is half. What is the total?



3b. Here is half. What is the total?




Extension

5a. These flowers have been halved incorrectly. How many should be in each group?




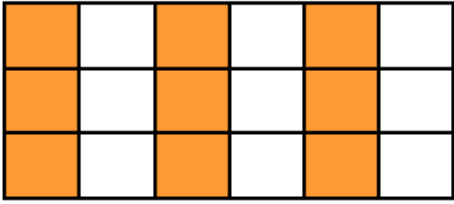
Explain how you got your answer.

5b. A bag of apples has been halved incorrectly. How many should be on each plate?





Explain how you got your answer.

Maths - Challenge 3

<p>5a. Complete the statement based on the picture below.</p>  <p>Half of _____ is _____.</p> <p>★ E VF</p>	<p>5b. Complete the statement based on the picture below.</p>  <p>Half of _____ is _____.</p> <p>★ E VF</p>
<p>6a. I am thinking of a number.</p> <p>Half of the number is an odd number between 8 and 10.</p> <p>What number am I thinking of?</p> <p>★ E VF</p>	<p>6b. I am thinking of a number.</p> <p>Half of the number is an odd number between 6 and 8.</p> <p>What number am I thinking of?</p> <p>★ E VF</p>

Extension

<p>8a. These toys have been halved incorrectly. How many should be in each box?</p>  <p>Explain how you got your answer.</p> <p>★ R</p>	<p>8b. The coins have been halved incorrectly. What value should be in each purse?</p>  <p>Explain how you got your answer.</p> <p>★ R</p>
<p>9a. There were 28 packs of stickers in the shop. Olivia bought half of all the packs of stickers at the shop. She gave half of what she bought to her brother.</p> <p>How many packs of stickers did she give her brother?</p> <p>Use counters or draw a picture to help you.</p>	<p>9b. There are 24 flowers in Gregor's garden. Half of the flowers are roses. Gregor picked half of the roses to give to his mum.</p> <p>How many roses did he give her?</p> <p>Use counters or draw a picture to help you.</p>

Maths - Challenge 4/5

Doubling and Halving



24. One ladybird has 12 spots. The second ladybird has half the number of spots of the first ladybird. **How many spots does the second ladybird have?**



Doubling and Halving



25. There were 6 cars in a car park. Half of them were driven home. **How many cars were left in the car park?**



Doubling and Halving



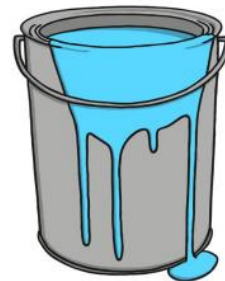
52. There are 24 hours in a day. **How many hours are in half a day?**



Doubling and Halving



53. There are 16 pots of paint on the shelf. Half of them are blue. **How many pots of paint are blue?**



Extension

Doubling and Halving



54. There are 18 jobs on a list. Half of them have been done. **How many jobs are left to do on the list?**



Doubling and Halving



55. There are 30 shells in a box. Half of them are orange. **How many of them are orange?**



