

## Terrific Tigers



























Please find today's learning tasks below.

The table below explains the tasks and you will find the resources underneath. Your child will know which challenge they usually access in each subject and which task will be appropriate for them.




























Year group: 1		Date Thursday 14 <sup>th</sup> May	
	Challenge 1	Challenge 2	Challenge 3
<b>English</b>	Practise writing all single letter shapes – use the sound mat to help you.	<p style="text-align: center;"><b>A Postcard from Space</b></p> <p style="text-align: center;">You have launched into space on an amazing adventure! Today you need to write to everyone back home to tell them about what has happened so far. You might want to include</p> <ul style="list-style-type: none"> <li>• Where you have been</li> <li>• What you have seen</li> <li>• What it feels like to be weightless</li> <li>• When you will be coming home</li> </ul>	
	Today we are trying to unscramble the sentence. Read the words at the bottom of the page and see if you can make a sentence. Can you complete the rest of the sheet? (or copy it into your book)	Use the sheet below or draw your own and write about all the marvellous things you have seen and done. Don't forget to include as much detail as you can and definitely 2A sentences and conjunctions.	
<b>Maths</b>	Can you count in 2s, 5s and 10s? If so try counting backwards in these steps? Can you do it yet?		
	<p><b>Adding equal groups</b></p> <p>Can you count the sets of 2 and add them? Record the additions as 2+ 2 etc then find the total. I have done the first one for you.</p>	<p><b>Adding equal groups</b></p> <p>Today we are continuing to count equal groups as repeated addition. Can you write the addition calculation and find the total? I have done the first one for you. Try the extension problem – can you solve it?</p>	<p><b>Adding equal groups</b></p> <p>Can you use the more than and less than signs to compare groups of repeated additions? (&gt; = more than, &lt; = less than) Next try and solve Beth's problem, is she correct?</p>
<b>Phonics</b>	As we have been in space all week, let's go and feed Obb and Bob some words on phonics play	As we have been in space all week, let's go and feed Obb and Bob some words on phonics play today. Go to	As we have been in space all week, let's go and feed Obb and Bob some words on phonics play today. Go to

	<p>today. Go to <a href="https://www.phonicsplay.co.uk/member-only/PicnicOnPluto.html">https://www.phonicsplay.co.uk/member-only/PicnicOnPluto.html</a> Username march 20 and password is home. Choose phase 2 and then revise all Phase 2.</p>	<p><a href="https://www.phonicsplay.co.uk/member-only/PicnicOnPluto.html">https://www.phonicsplay.co.uk/member-only/PicnicOnPluto.html</a> Username march 20 and password is home. Choose phase 3 and then Revise all phase 3.</p>	<p><a href="https://www.phonicsplay.co.uk/member-only/PicnicOnPluto.html">https://www.phonicsplay.co.uk/member-only/PicnicOnPluto.html</a> Username march 20 and password is home. Choose phase 5 and then Revise all Phase 5.</p>
<b>Reading</b>	Go to Rising stars, reading planet and read an ebook.		
<b>Other</b>	<p>Today we are thinking about <b>SPACE</b></p> <p>On Tuesday you made a space rocket, yesterday you created an astronaut to fly your rocket into space so today you need to use your imagination! You are now the astronaut, getting ready to go off into space in your spaceship and discover and visit your brand new planet! Who will you meet? Draw and label the Alien you meet as you land on the planet! Add some more information to describe your alien if you can 😊</p>		

Unless otherwise specified , please complete the tasks in either your home learning book or on a word document.

a 	b 	c 	d 	e 	f 	g 
h 	i 	j 	k 	l 	m 	n 
o 	p 	q 	r 	s 	t 	u 
v 	w 	x 	y 	z 	Sound Mat 1	

# Sound Mat 2

ng 	nk 	sh 	ch 	th 	ay 	ai 	ee 	ea 
igh 	ow 	oa 	oo 	oo 	ar 	or 	ou 	ow 
oi 	oy 	er 	ir 	ur 	air 	ear 	ure 	qu 

## English Challenge 1

# Space Sentence Unscramble



I can make the sentence

I can write

can

I can draw a picture of the sentence

I can write the sentence



twinkl.co.uk

see

Can

you

the

alien's

spaceship

**English Challenge 2 and 3**

Dear \_\_\_\_\_

---

---

---

---

---

---

---

---

---

---

---

---

---

from \_\_\_\_\_



---

---

---

---

## Challenge 1 Maths

- a How many single cherries altogether?



$$2 + 2 + 2 + 2 + 2 = 10$$

Now you try:

- b How many doughnuts altogether?



- 
- c How many ice-cream scoops altogether?



- 
- d How many cookies altogether?



## Challenge 2 Maths

- a How many ice-cream scoops




$$2 + 2 + 2 + 2 + 2 = 10$$

**Now you try:**

- b How many single cherries altogether?



- 
- c How many petals altogether?




- 
- How many fish altogether?





**Challenge 2 Extension:**

Che is counting cherries.



$$4 + 2 = 6$$

Can you spot and explain Che's mistake?

### Challenge 3 Maths

---

Use  $<$  or  $>$  to compare the repeated additions.

$5 + 5$	<input type="text"/>	$2 + 2 + 2 + 2$
$10 + 10 + 10$	<input type="text"/>	$5 + 5 + 5 + 5 + 5$
$2 + 2 + 2 + 2$	<input type="text"/>	$5 + 5 + 5$
$10 + 10$	<input type="text"/>	$5 + 5 + 5 + 5 + 5$
$5 + 5 + 5$	<input type="text"/>	$10 + 10$

Beth is making equal groups of doughnuts.



Adding one more group  
is the same as adding  
10 more doughnuts.

Do you agree with Beth?

Explain why?

# Design an Alien



Can you design your own alien in the space below?