


	Challenge 1	Challenge 2	Challenge 3
English	<p>Watch this video clip from the beginning to 33 seconds</p> <p>https://www.literacyshed.com/something-fishy.html</p> <p>Then write a short retell for each picture.</p> <p>Remember to include:</p>  <p>There are spellings to help you</p>	<p>Task 1 - Answer the questions using the picture to help you. There are no wrong answers - it is your opinion.</p> <p>Task 2 - Can you draw what you think the animal town would look like. You could add some key vocabulary to your picture to help you with your writing tomorrow.</p> <p>For example some verbs, adjectives and prepositions.</p>	<p>Task 1 - Answer the questions using the picture to help you. There are no wrong answers - it is your opinion.</p> <p>Task 2 - Can you draw what you think the animal town would look like. You could add some key vocabulary to your picture to help you with your writing tomorrow.</p> <p>For example some verbs, adjectives and prepositions.</p>
Maths	<p>a) Pictograms - can you answer the questions on your pictogram? Don't forget to look at the key.</p> <p>b) TTrackstars</p>	<p>a) Pictograms - can you answer the questions on your pictogram? Don't forget to look at the key.</p> <p>b) TTrackstars</p>	<p>a) Pictograms - can you follow the clues and fill in the missing information on the pictograms. Don't forget to look at the keys.</p> <p>b) TTrackstars</p>
Reading/ Spellings	<p>Can you practice writing the spellings and then fill in the missing gaps?</p> <p>Don't worry if you have finished your home links book. Why not have a look at the e books that have been added to this week's folder and get stuck into one of those.</p>	<p>Can you practice writing the spellings and then fill in the missing gaps?</p>	<p>Can you practice writing the spellings and then fill in the missing gaps?</p>
Other	<p>Science - Plants. Go onto education city (science 18.5.20) and explore about plants. Can you make a poster or a leaflet on the information you found out about?</p>		

Challenge 1 spellings

Look and say	Look, say and write	Cover and write	Check and write again
old			
cold			
gold			
hold			
told			

Fill in the missing word.

1. I _____ my dad's hand to cross the road.
2. It is too _____ outside.
3. My mum _____ me to wash my hands.
4. She earned a _____ star.
5. I have a very _____ teddy.

Challenge 2 and 3 spellings

Look and say	Look, say and write	Cover and write	Check and write again
accident			
actual			
address			
answer			
appear			
arrive			

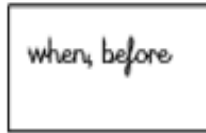
Fill in the missing word.

1. Write the _____ on the envelope.
2. Immy knocked over her drink by _____.
3. I stood at the bus stop waiting for a bus to _____.
4. The _____ price was lower than I thought.
5. Tim doesn't _____ to be very upset.
6. Do you know the _____ to the question?

Write your own sentence containing 'accident' and 'appear'.

English challenge 1

Vocabulary to help



Spellings to help:

Spellings

girl chair washing
machine door book
reading yawned
spinning opened
peered

ly words

Quietly Slowly

Openers

Just then Suddenly
Next Today
At that moment

Challenge 1 English - retell each picture. Remember to include:

joined writing

2A

WOW words



when, before

ly







Challenge 2 and 3 English



Task 1 – answer the questions – remember there is no right or wrong answer. It is what you think. Remember to write your answers in full sentences.

Question time!

Which animal would be suited to working in the health clinic?

Can you give suggestions as to the occupations of the other animals in the picture?

If you could have any job, what would it be and why?

If you could be any animal, what would it be and why?

What problems might they encounter in Animal Town that humans don't encounter in human towns?



Are there any similar problems that both animals and humans experience?

Would animals be better off without humans? Would humans be better off without animals?

Task 2 – Draw a picture of what you think the animal town would look like.

Maths help

Remember to look at the key to see how much each picture is worth.

If  = 2 then  = 1

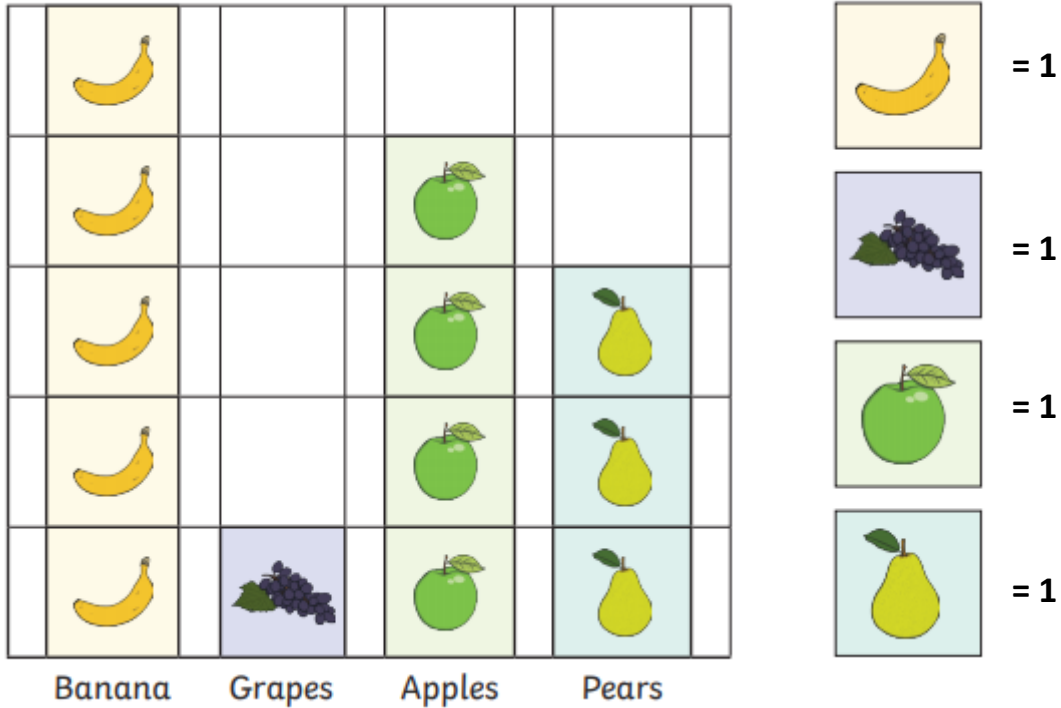
More = subtract

And = add

Altogether = add

Total = add

Favourite Fruit



What is the favourite fruit? _____

What is the least favourite fruit? _____

How many children chose Bananas? _____






How many children were asked altogether? _____


How many children chose Apples and Pears? _____

Task 2

An extra category was added to the survey, 6 people have chosen oranges, can you draw what this would look like using your pictogram and key?

4a. Answer the questions about the number of cereal boxes sold.

Cereal	Number of Cereal Boxes
Coco Chips	
Sugar Flakes	
Crunchies	
Wheat Bites	
Bran Hoops	






Key:  = 8 cereal boxes sold


- A. How many boxes of Sugar Flakes were sold?
- B. How many more boxes of Coco Chips were sold than Crunchies?
- C. How many boxes of Bran Hoops and Sugar Flakes were sold?
- D. How many fewer boxes of Wheat Bites were sold compared to Crunchies?



VF

4b. Answer the questions about the number of cupcakes sold in a cafe.

Cupcake	Number of Cupcakes Sold
Carrot	
Lemon	
Chocolate	
Vanilla	
Red velvet	

Key:  = 10 cupcakes sold



- A. How many chocolate cupcakes were sold?
- B. How many fewer carrot cupcakes were sold than lemon cupcakes?
- C. How many red velvet and vanilla cupcakes were sold in total?
- D. How many more chocolate cupcakes were sold than carrot cupcakes?




VF

Task 2

3a. Complete the missing sections of the pictogram using the information below.



Transport	Number of Children
Walk	
Bicycle	
Car	
Bus	
Taxi	


Key:  = 3 children

- A. 9 fewer children walk to school than come by car.
- B. Double the number of children who cycle take the bus.
- C. 3 times as many children take the taxi than cycle.

Maths Challenge 3



5a. Complete the missing sections of the pictogram using the information below.


Snack	Number of People
Cherries	
Cookie	
Strawberry	
Chocolate	
Orange	

Key:  = 12 people

- A. 6 more than the total of oranges chose strawberry.
- B. 9 fewer than the total of chocolate chose oranges.
- C. 6 more than the total of cherries chose a cookie.

5b. Complete the missing sections of the pictogram using the information below.



Food	Number of People
Egg	
Waffle	
Porridge	
Toast	
Doughnut	

Key:  = 9 people

- A. 18 more people chose toast than a waffle.
- B. 9 fewer people than the total of doughnut chose a waffle.
- C. 9 more people chose an egg than porridge.

Task 2

8a. Brad is drawing a pictogram.

Flowers	Number of Children
Rose	
Sunflower	
Bluebell	
Daisy	

He knows more children like daisies than bluebells, but fewer children like daisies than roses. Complete the pictogram showing one of the possibilities, if one flower is worth 7.