



Please find today's learning tasks below.

The table below explains the tasks and you will find the resources underneath. Work can be completed in homework books.

Year group: 3		Date:	
	Challenge 1	Challenge 2	Challenge 3
English	<p>To write a description on the image below.</p> <p>Try to include:</p> <div style="display: flex; flex-wrap: wrap; justify-content: space-around;"> <div style="border: 1px solid black; padding: 2px; margin: 2px;"><i>joined writing</i></div> <div style="border: 1px solid black; padding: 2px; margin: 2px;">2A</div> <div style="border: 1px solid black; padding: 2px; margin: 2px;">WOW Words</div> <div style="border: 1px solid black; padding: 2px; margin: 2px;"></div> <div style="border: 1px solid black; padding: 2px; margin: 2px;">ly</div> <div style="border: 1px solid black; padding: 2px; margin: 2px;"></div> </div>	<p>To write a setting description on the image given below in past tense</p> <p>Try and include:</p> <p>A range of conjunctions prepositions adventurous adjectives Sentence openers</p>	<p>To write a setting description on the image given below in past tense</p> <p>Try to include:</p> <p>a range of sentences expanded noun phrases powerful verbs similes</p>
Maths	<p>A) Can you use arrays to work out the multiplication questions?</p> <p>B) Go on hit the button and try and beat your best.</p>	<p>A) Can you use grid method to work out the multiplication questions?</p> <p>B) Go on hit the button and try and beat your best.</p>	<p>A) Can you use grid method to work out the multiplication questions?</p> <p>B) Go on hit the button and try and beat your best.</p>
Reading/ Spellings	<p>Can you write the common exception words given 3 times? (see table on next pages)</p>	<p>Can you write the year 3 words given 3 times? (see table on next pages)</p>	<p>Can you write the year 3 words given 3 times? (see table on next pages)</p>
<p>Don't worry if you have finished your homelinks book. Go over to http://www.oxfordowl.co.uk sign up for free and read your child's book band and record it in their home links book.</p>			
Other	<p>Art - look at the sketch challenges below and let's have some fun with sketching!</p>		

Challenge 1 spellings

Can you re write these words using a different colour each time. e.g. house house house house

<u>Spelling</u>	<u>Write</u>	<u>Write</u>	<u>Write</u>
build			
house			
school			
island			
sure			

Challenge 2 and 3 spellings

Can you re write these words using a different colour each time. e.g. house house house house

Spellings	Write	Write	Write
certain			
promise			
possible			
favourite			
enough			
business			
particular			

Challenge one English



shiny, ancient, well built, over grown, jaw dropping, huge, gigantic, rusty, strong



All of a sudden, Slowly, After a while, Underneath my feet, In the sky,



quickly, slowly, carefully, quietly, softly, bravely




Challenge 2 and 3 English

Can you write a setting description? Don't forget that detail!

Try including:

- Adventurous adjectives (illuminous, shiny, ancient, well built, over grown, jaw-dropping)
- Prepositions (where something is)
- Sentence openers (All of a sudden, Cautiously, _____ing, After a while, Underneath my feet, In the sky,)
- A range of conjunctions (as, if, although, when, until, while, once, before, after, but, so)






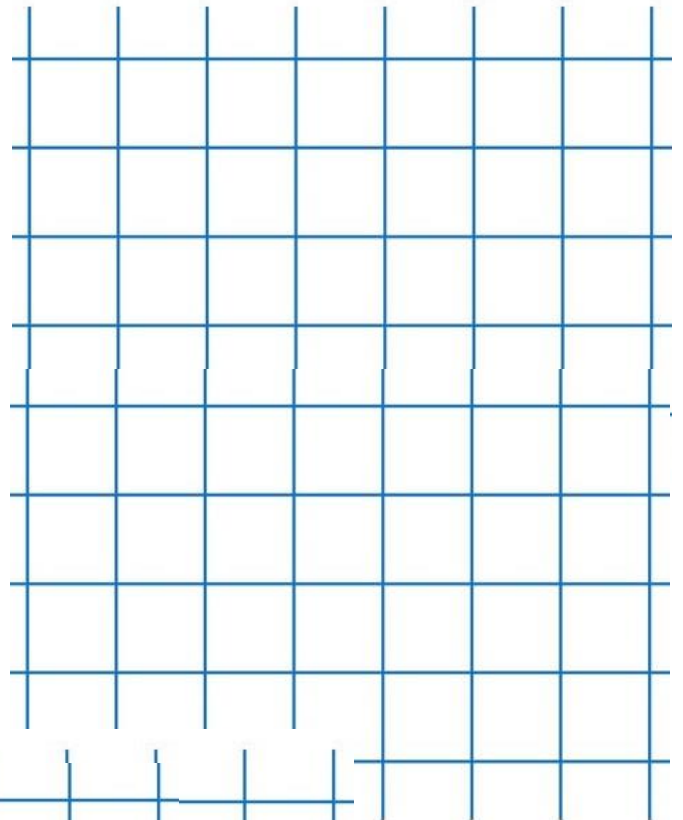
Challenge 1 Maths

Let's go back at multiply using arrays. Can you work out these calculations using arrays.

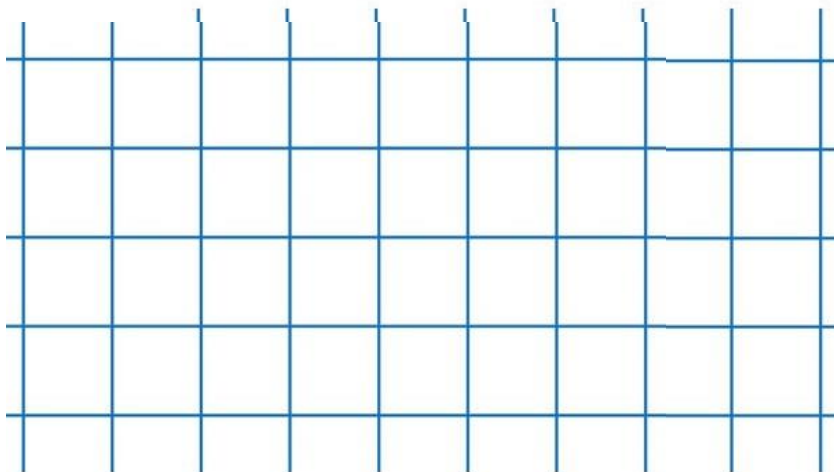
$6 \times 3 =$



$7 \times 4 =$



$5 \times 8 =$

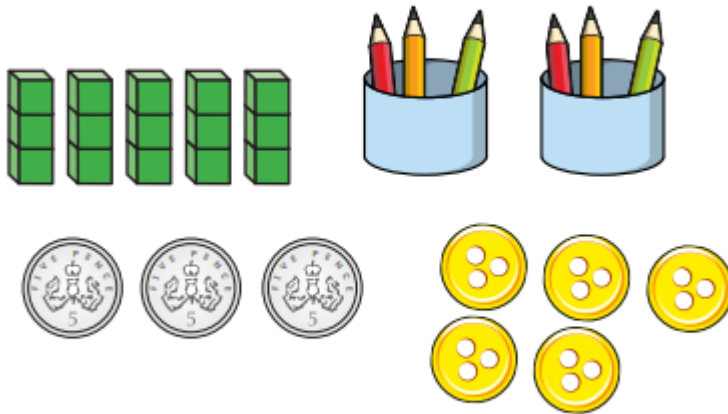


	4	\times	3	=		
	●	●	●			
	●	●	●			
	●	●	●			
	●	●	●			

Task 2

Which is the odd one out?

Tick your answer.




Explain your answer.


Is there more than one answer?

Challenge 2 Maths


$32 \times 2 =$



$26 \times 5 =$



$34 \times 2 =$



Task 2

Ellie says that $36 \times 2 = 62$.

Is she right? Explain your answer.


One toaster costs £32

How much do 3 toasters cost?




Challenge 3 Maths


$47 \times 3 =$



$63 \times 4 =$



$95 \times 8 =$



Task 2

Tick the multiplications that you can work out in your head.

4×22

3×23

3×33

12×4

3×32

4×20


Odd one out

$38 \times 2 =$

$25 \times 3 =$

$19 \times 4 =$

Art



Let's have some fun with some sketching!

If you're really proud of your work why not tweet it to us using @KingsfieldSch. We can't wait to see it