


Please find today's learning tasks below.

The table below explains the tasks and you will find the resources underneath. Your child will know which challenge they usually access in each subject and which task will be appropriate for them. There is a sticker in the front of their Red Home Learning Books if they were able to get one in the last week. If they did not any exercise book or lined paper will be fine.

Year group: 1/2		Date: Wednesday 22 <sup>nd</sup> April			
	Challenge 1	Challenge 2	Challenge 3	Challenge 4	Challenge 5
<p>Read the three Tongue Twister Poems. Try and learn one and say it to someone in your family. Can you say it really fast?!</p> 					
<b>English</b>	Please see separate e-mail	<p>What on earth is that on your face?            Draw a picture of your own face.            Label all the different parts of your face using a rhyming word for each part (A nose like a hose; Two eyes like pies, etc.)</p>			
<b>Maths</b>	<p>Add the numicon.            Can you write the question as a number sentence? ie  <math>5+4=9</math></p>	<p>Solve the addition word problems. Write the number sentence for each problem.</p>		<p>Solve the addition sums. I have done the first one to help you. If you struggle you can draw the dienes to help you.</p>	

Reading	<a href="https://www.booktrust.org.uk/books-and-reading/have-some-fun/storybooks-and-games/open-very-carefully/">https://www.booktrust.org.uk/books-and-reading/have-some-fun/storybooks-and-games/open-very-carefully/</a> Read along to 'Open Very Carefully' by Nick Bromley.		
Phonics	Match the pictures to the word. <a href="https://www.phonicsplay.co.uk/PictureMatch.html#">https://www.phonicsplay.co.uk/PictureMatch.html#</a>	Balloon Pop. Choose 3 sounds you wish to practice. Pop the balloons that have the sound shown in the bottom left corner. <a href="https://www.ictgames.com/phonicsPop/index.html">https://www.ictgames.com/phonicsPop/index.html</a>	Look at the words that are often spelt wrong. Click on the correct spelling. <a href="https://howtospell.co.uk/misspelled-words-quiz-1">https://howtospell.co.uk/misspelled-words-quiz-1</a>
Other	Today is Earth Day.  Read the info below and choose one of the activities to do.  Please send in photos so we can share on Twitter ☺		

Unless otherwise specified, please complete the tasks in either your homework book or on a word document.

## English - starter task

### Three Tongue Twister Poems

#### Peter Piper

Peter Piper picked a peck of pickled pepper;  
Did Peter Piper pick a peck of pickled pepper?  
If Peter Piper picked a peck of pickled pepper,  
Where's the peck of pickled pepper Peter Piper picked?

*Anon*

#### Camilla Caterpillar

Camilla Caterpillar kept a caterpillar killer-cat.  
A caterpillar killer categorically she kept.  
But alas the caterpillar killer-cat attacked Camilla  
As Camilla Caterpillar catastrophically slept.

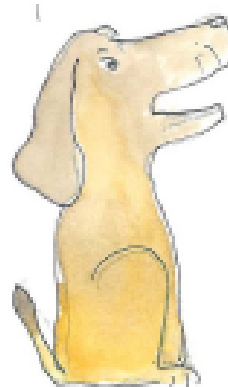
*Mike Jubb*

#### Dick's Dog

Dick had a dog  
The dog dug  
The dog dug deep  
How deep did Dick's dog dig?

Dick had a duck  
The duck dived  
The duck dived deep  
How deep did Dick's duck dive?

Dick's duck dived as deep as Dick's dog dug.



*Trevor Millum*

---

Maths - Challenge 1

$$\begin{array}{|c|} \hline \bullet \\ \bullet \\ \bullet \\ \bullet \\ \bullet \\ \bullet \\ \hline \end{array} + \begin{array}{|c|} \hline \bullet \\ \bullet \\ \bullet \\ \bullet \\ \hline \end{array} = \square$$

$$\begin{array}{|c|} \hline \bullet \\ \bullet \\ \bullet \\ \bullet \\ \bullet \\ \bullet \\ \bullet \\ \hline \end{array} + \begin{array}{|c|} \hline \bullet \\ \bullet \\ \bullet \\ \hline \end{array} = \square$$

$$\begin{array}{|c|} \hline \bullet \\ \bullet \\ \bullet \\ \bullet \\ \bullet \\ \bullet \\ \hline \end{array} + \begin{array}{|c|} \hline \bullet \\ \bullet \\ \bullet \\ \bullet \\ \bullet \\ \bullet \\ \bullet \\ \hline \end{array} = \square$$

$$\begin{array}{|c|} \hline \bullet \\ \bullet \\ \bullet \\ \bullet \\ \bullet \\ \bullet \\ \hline \end{array} + \begin{array}{|c|} \hline \bullet \\ \bullet \\ \bullet \\ \bullet \\ \bullet \\ \bullet \\ \hline \end{array} = \square$$

$$\begin{array}{|c|} \hline \bullet \\ \bullet \\ \bullet \\ \bullet \\ \bullet \\ \bullet \\ \bullet \\ \hline \end{array} + \begin{array}{|c|} \hline \bullet \\ \bullet \\ \bullet \\ \bullet \\ \hline \end{array} = \square$$

$$\begin{array}{|c|} \hline \bullet \\ \bullet \\ \bullet \\ \bullet \\ \bullet \\ \bullet \\ \bullet \\ \hline \end{array} + \begin{array}{|c|} \hline \bullet \\ \bullet \\ \bullet \\ \bullet \\ \bullet \\ \bullet \\ \hline \end{array} = \square$$

## Maths - Challenge 2/3


If you had 10 glass bottles and 3 plastic bottles, how many bottles are there altogether?



If you had 5 milkshakes and 2 fizzy drinks, how many drinks do you have in total?



If you had 14 squares of chocolate and 5 chocolate fingers, how many do you have in total?



If you have 5 blackbirds and 9 robins in your garden, how many are there?



If you had 5 cherry cakes and 5 plain cakes, how many would you have altogether?



If you had 5 books and 6 magazines, how many do you have?



## Maths - Challenge 4/5

54

37

62

+ 27

+ 26

+ 38

81

|

48

56

43

+ 33

+ 35

+ 39

### Extension

78

66

97

+ 86

+ 96

+ 78