
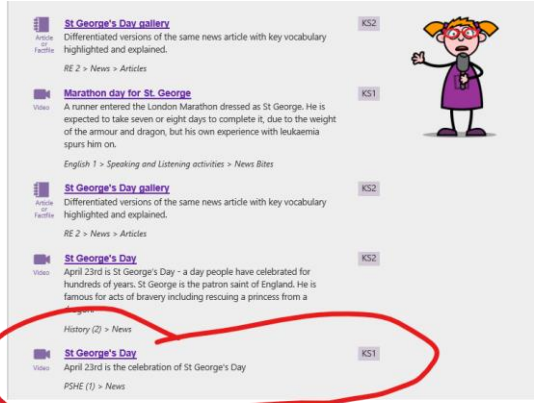


Please find today's learning tasks below.

The table below explains the tasks and you will find the resources underneath. Your child will know which challenge they usually access in each subject and which task will be appropriate for them. There is a sticker in the front of their Red Home Learning Books if they were able to get one in the last week. If they did not any exercise book or lined paper will be fine.


Year group: 1/2		Date: Thursday 23 <sup>rd</sup> April			
	Challenge 1	Challenge 2	Challenge 3	Challenge 4	Challenge 5
Read the two poems, <i>If You Should Meet a Crocodile</i> and <i>The Vulture</i> What things do the poems have in common? Which do you like the best? Why is that?					
<b>English</b>	Please see separate e-mail	Use a coloured pen to highlight the pairs of rhyming words in <i>The Vulture</i> . If you can't print it off, tell a grown-up which words rhyme. Are you sure that you have all pairs listed on Rhymes in <i>The Vulture</i> ? Read the other words in the box below the table. Copy each into the correct rhyme section. <b>Challenge 4/5</b> I also want you to add other rhyming words to the table.			
<b>Maths</b>	Solve the addition problems. You can ask someone to help read them to you if you want.	Complete the Tens frames to find the answers. Can you do the extension as well?	Solve the addition problems below. Remember they are ALL addition problems!		

Reading	<a href="https://www.booktrust.org.uk/books-and-reading/have-some-fun/storybooks-and-games/the-dragon-machine/">https://www.booktrust.org.uk/books-and-reading/have-some-fun/storybooks-and-games/the-dragon-machine/</a> Read along to 'The Dragon Machine' by Helen Ward.			
Phonics	Search on YouTube for Geraldine the Giraffe. Choose a sound to practice.	Search on YouTube for Geraldine the Giraffe. Choose a sound to practice.	Search on YouTube for Geraldine the Giraffe. Choose a sound to practice.	Plurals that end with -es. Choose the correct spelling. <a href="https://www.educationquizzes.com/ks1/english-spelling/year-1-plurals-that-end-in-es/">https://www.educationquizzes.com/ks1/english-spelling/year-1-plurals-that-end-in-es/</a>
Other	<p>Today's learning will be about St George as it is St George's Day today!          Go to espresso</p>  <p><a href="https://centralespresso.co.uk/espresso/primary_uk/subject/news/video/item788650/gradel/index.html?source=search-all-all-all&amp;source-keywords=st%20georges%20day">https://centralespresso.co.uk/espresso/primary_uk/subject/news/video/item788650/gradel/index.html?source=search-all-all-all&amp;source-keywords=st%20georges%20day</a></p> <p>Espresso.co.uk - Username: student28034 Password: kingsfield</p> <p>Search for St Georges Day and you will find under KS1 PSHE   news   this:</p>  <p>Find out about St George and then can you draw and colour the flag of England?</p>			


Unless otherwise specified, please complete the tasks in either your homework book or on a word document.

## **If You Should Meet a Crocodile**

If you should meet a crocodile,  
Don't take a stick and poke him;  
Ignore the welcome in his smile,  
Be careful not to stroke him.  
For as he sleeps upon the Nile,  
He thinner gets and thinner;  
But whene'er you meet a crocodile  
He's ready for his dinner.



## The Vulture



The vulture eats between his meals  
And that's the reason why,  
He very, very rarely feels  
As well as you or I.

His eye is dull, his head is bald,  
His neck is growing thinner.  
Oh! What a lesson for us all  
To only eat at dinner.

# English - Challenge 2/3/4/5

## Rhymes in The Vulture

meals feels	why I	bald all	dinner thinner

dry      wall      seals      pie      tall  
beginner      sigh      eels      sinner      wall  
                 eye      winner      kneels

# Maths - Challenge 1


If you had 10 glass bottles and 3 plastic bottles, how many bottles are there altogether?



If you had 5 milkshakes and 2 fizzy drinks, how many drinks do you have in total?



If you had 14 squares of chocolate and 5 chocolate fingers, how many do you have in total?



If you have 5 blackbirds and 9 robins in your garden, how many are there?



If you had 5 cherry cakes and 5 plain cakes, how many would you have altogether?



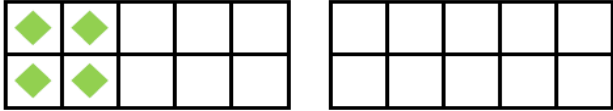
If you had 5 books and 6 magazines, how many do you have?



# Maths - Challenge 2/3

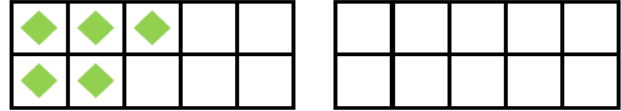
5a. Complete the calculation and ten frame below.

$$9 + 6 = \square$$



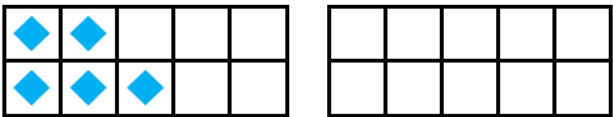
5b. Complete the calculation and ten frame below.

$$7 + 7 = \square$$



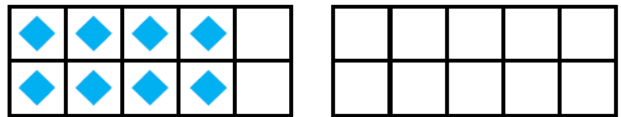
1a. Complete the calculation and ten frame below.

$$5 + 6 = \square$$



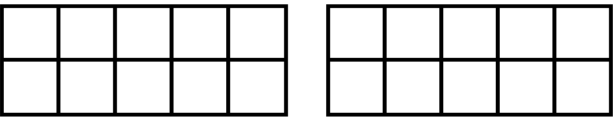
1b. Complete the calculation and ten frame below.

$$8 + 5 = \square$$



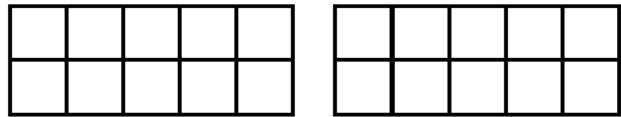
9a. Complete the calculation and ten frame below.

$$4 + \text{nine} = \square$$




9b. Complete the calculation and ten frame below.

$$5 + \text{six} = \square$$



## Extension

1a. Choose a picture card to complete the number sentences below.




$$8 + \square + 4 = 14$$

$$7 + \square + 5 = 15$$



PS

1b. Choose a picture card to complete the number sentences below.



$$6 + \square + 5 = 15$$


$$5 + \square + 3 = 13$$



PS



## Maths - Challenge 4/5

I bake some buns for school. If we sell 35 and I have 28 left, how many buns did I bake?



I have just spent 34p at the shop and have 36p left. How much money did I have to begin with?

Holly makes a number. Harry also makes a number. When they add their numbers together they get 59. Do you agree? Explain your thinking.



Circle sometimes, always or never to these statements.

If I add an odd number and another odd number I get an even number.

sometimes

always

never

If I add an odd number and an even number the answer will be even.

sometimes

always

never

If I add 2 numbers which are both less than 50 the answer will be more than 100.

sometimes

always

never