
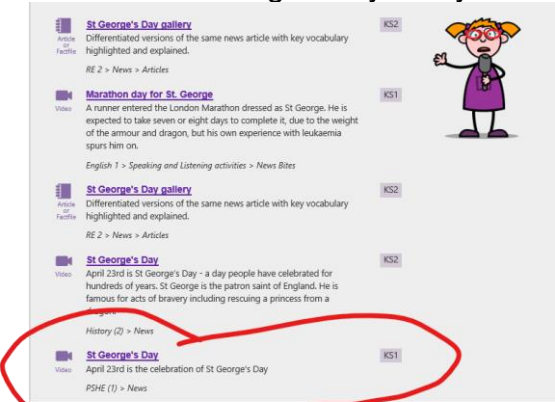


Terrific Tigers

Please find today's learning tasks below.


The table below explains the tasks and you will find the resources underneath. Your child will know which challenge they usually access in each subject and which task will be appropriate for them.

Year group: 1 Date: 23rd April			
	Challenge 1	Challenge 2	Challenge 3
English	Say the alphabet to your grown up.	Read the two poems, If You Should Meet a Crocodile and The Vulture o What things do the poems have in common? o Which do you like the best? Why is that?	
	Can you draw a picture of something that rhymes with the picture I have given you? If you can't print, you could write down what my picture is (e.g. cat) and then draw something that rhymes with it.	Use a coloured pen to highlight the pairs of rhyming words in The Vulture. If you can't print it off, tell a grown-up which words rhyme. o Are you sure that you have all pairs listed on Rhymes in The Vulture? o Read the other words in the box below the table. Copy each into the correct rhyme section. Challenge: Think of other rhyming words....	
Maths	Missing numbers in additions Look at the addition sentences below. How many more red squares would you need to draw to make 8 (the same as the blue squares) Use this to help you fill in the missing numbers.	Missing numbers in additions Make each cake have 9 candles then write an addition sentence o show pairs that make 9. Start with the number of candles already on the cake.	Missing numbers in additions Can you find the missing numbers in the number sentences? You can use number lines or counters to help. Challenge: Can you do a switcheroo? Swap the numbers in an addition sentence to make a new addition.
Reading	https://www.booktrust.org.uk/books-and-reading/have-some-fun/storybooks-and-games/the-dragon-machine/ Read along to 'The Dragon Machine' by Helen Ward.		
Phonics	Go to https://www.phonicsplay.co.uk/ Username March20	Go to https://www.phonicsplay.co.uk/ Username March20	Go to https://www.phonicsplay.co.uk/ Username March20

	Password home Select Dragons den phase 2 Pick revise all phase 2	Password home Select Dragons den phase 3 Pick revise all phase 3	Password home Select Phase 5 Train your brain Pick the first set 5a and practise spelling words.
Other	<p>Today's learning will be about St George as it is St George's Day today!</p>  <p>Go to espresso https://central.espresso.co.uk/espresso/primary_uk/subject/news/video/item788650/grade1/index.html?source=search-all-all-all&source-keywords=st%20georges%20day Espresso.co.uk - Username: student28034 Password: kingsfield Search for St Georges Day and you will find under KS1 PSHE 1 news 1 this:</p>  <p>Find out about St George and then can you draw and colour the flag of England?</p>		

Unless otherwise specified , please complete the tasks in either your home learning book or on a word document.


Challenge 1 English




English Challenge 2 and 3

If You Should Meet a Crocodile

If you should meet a crocodile,
Don't take a stick and poke him;
Ignore the welcome in his smile,
Be careful not to stroke him.
For as he sleeps upon the Nile,
He thinner gets and thinner;
But whene'er you meet a crocodile
He's ready for his dinner.



The Vulture



The vulture eats between his meals
And that's the reason why,
He very, very rarely feels
As well as you or I.

His eye is dull, his head is bald,
His neck is growing thinner.
Oh! What a lesson for us all
To only eat at dinner.

Challenge 2 and 3 English

Rhymes in The Vulture

meals feels	why I	bald all	dinner thinner

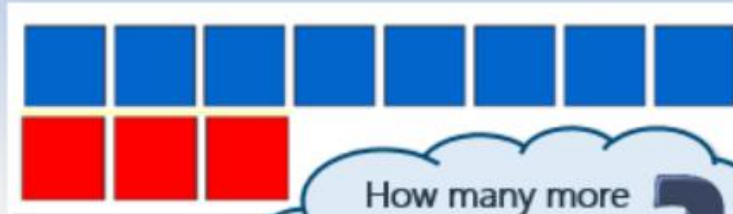
dry wall seals pie tall
beginner sigh eels sinner wall
 eye winner kneels

Maths

Learning Reminders

Know number bonds to 8; Recognise that addition can be done in any order.

$$3 + \square = 8$$



$$3 + 5 = 8$$

$$5 + 3 = 8$$

5 3

How many more red cubes are needed to make 8?


What number should go in the box now?

3 and 5 are 'special' number partners that make 8: a **number bond**. They can be added in any order to make 8.


Challenge 1 Maths

How many more to make 8?

Draw the missing number of cubes and write the missing number in the number sentence below:



$$4 + \square = 8$$



$$5 + \square = 8$$



$$2 + \square = 8$$





$$7 + \square = 8$$

Challenge 2 Maths

Birthday number bond candles

How many more candles to make 9? Finish each number sentence.

		
2 + <input type="text"/> = 9	5 + <input type="text"/> = <input type="text"/>	<input type="text"/> + <input type="text"/> = <input type="text"/>

		
<input type="text"/> + <input type="text"/> = <input type="text"/>	<input type="text"/> + <input type="text"/> = <input type="text"/>	<input type="text"/> + <input type="text"/> = <input type="text"/>

		
<input type="text"/> + <input type="text"/> = <input type="text"/>	<input type="text"/> + <input type="text"/> = <input type="text"/>	<input type="text"/> + <input type="text"/> = <input type="text"/>

Challenge 3 Maths

$3 + \square = 10$

$12 + \square = 20$

$7 + \square = 10$

$8 + \square = 20$

$13 + \square = 20$

$19 + \square = 20$

$7 + \square = 20$

$1 + \square = 20$

Challenge: Find more pairs that make 20 and switch them over to make a new addition sentence.

Number Lines

